

Monday -

Adding a 3-digit number and 10s

Discover



- 1 a) The birch tree is 10 years older than the beech tree.
The horse chestnut is 20 years older than the beech tree.
Use addition to work out their ages.
- b) Represent the addition for the horse chestnut on a number line.

Share

a) $184 + 10$ can be solved like last lesson but $184 + 20$ is different.

$$8 \text{ tens} + 1 \text{ ten} = 9 \text{ tens}$$

$$184 + 10 = 194$$



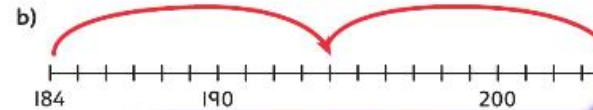
The birch tree is 194 years old.

H	T	O

H	T	O

$$184 + 20 = 204$$

The horse chestnut tree is 204 years old.



I wonder if I could add 16 and then add 4?
But that wouldn't be as clear as adding 2 tens.

$184 + 10 = ?$
I can add the 10s.

$184 + 20 = ?$
I will add the 10s.
 $8 \text{ tens} + 2 \text{ tens} = 10 \text{ tens}$
There are 10 tens. I don't think 1,104 is correct.

Exchange 10 tens for 1 hundred.



Think together

- 1 The oak tree is 50 years older than the beech tree.
How old is the oak tree?

H	T	O

$$184 + 50 = \square$$

The oak tree is years old.

- 2 A giant redwood tree is 260 years old.
How old will it be in 90 years?

H	T	O

$$260 + 90 = \square$$

The giant redwood will be years old.

- 3 A cypress tree is 385 years old.

Complete the information in the table.

Time	Calculation	Age of tree
Present day	$385 + 0$	<input type="text"/> years
30 years from now	$385 + 30$	<input type="text"/> years
60 years from now	$385 + \square$	<input type="text"/> years
<input type="text"/> years from now	$385 + \square$	475 years

It looks like one of these is a missing number problem.



- 4 For which of these calculations do you need to exchange 10 tens for 1 hundred?

$$60 + 365 = ?$$



I know what to do for $365 + 60$, but what about $60 + 365$?

I will add in a different order.




Adding a 3-digit number and 10s

- 1 There are 475 people already visiting the castle.

The coach brings 50 more people.

How many people are visiting the castle now?

H	T	O



$$475 + \square = \square$$

There are \square people visiting the castle now.

- 2 Richard is using drawings and place value equipment to solve these calculations. Complete his additions.

a) + =

$$\square + \square = \square$$

c) + =

$$\square + \square = \square$$

b) $\begin{array}{|c|c|c|} \hline 4 & 8 & 0 \\ \hline \end{array} + \begin{array}{|c|c|} \hline 1 & 2 \\ \hline \end{array}$

$$\square + \square = \square$$

d)

$$\square + \square = \square$$

57

- 3 Complete the missing numbers.

a) $234 + 90 = \square$

b) $371 + 50 = \square + 60$

c) $\square = 40 + 569$

d) $20 + \square = 319$

e) 50 more than 762 is \square

f) $150 = \square + 90$

- 4 What mistake has Isla made?



80 + 538
8 tens + 3 tens = 11 tens
80 + 538 = 518



Isla

- 5 Solve these additions.

a) $294 + 70 = \square$

c) $284 + 80 = \square$

e) $274 + 90 = \square$

b) $\square = 90 + 326$

d) $\square = 70 + 346$

f) $\square = 50 + 366$

Explain any patterns that you noticed.

- 6 Complete each addition to match each answer shown on the number line.

CHALLENGE

$$\boxed{4} \boxed{} \boxed{} + \boxed{} \boxed{0} \quad \boxed{4} \boxed{9} \boxed{} + \boxed{} \boxed{} \boxed{0}$$



$$\boxed{} \boxed{7} \boxed{} + \boxed{} \boxed{0} \quad \boxed{4} \boxed{} \boxed{} + \boxed{} \boxed{} \boxed{0}$$

I can find more than one addition for some calculations.



Reflect

- When I add a 3-digit number and tens, I know I will need to _____
- exchange 10 tens for 1 hundred if _____
- _____
- _____
- _____

Subtracting 10s from a 3-digit number

Discover



- 1 a) Jen has 210 m of dinosaur fabric to sell.
How much is left after she sells 20 m?
- b) Jen sells some more dinosaur fabric. Now she has 140 m left.
How much did she sell?

Share

a) $210 - 20 = ?$



H	T	O



I will try subtracting the tens.
 $20 - 10 = 10$
 So is the answer 210 m left?
 That can't be correct; that's what I started with.

You have to exchange 1 hundred for 10 tens.



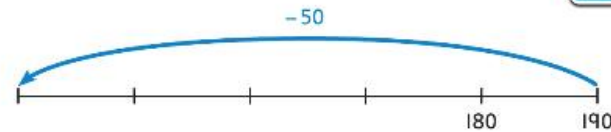
11 tens - 2 tens = 9 tens

$210 - 20 = \square$

Jen has 190 m of dinosaur fabric left.

H	T	O

b) $190 - \square = 140$

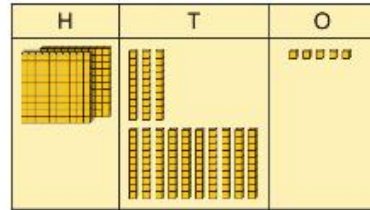
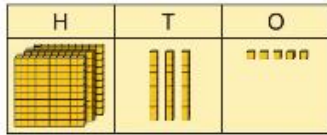


Jen has sold 50 m more dinosaur fabric.

Think together

- 1 Jen has 335 m of space fabric and sells 50 m.

How much is left?



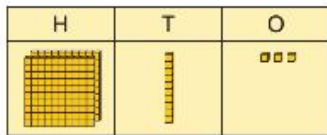
tens - tens = tens

$$335 - 50 = \square$$

There is m of space fabric left.

- 2 Toshi has 80 m of bee fabric to sell. Jen has 213 m of bee fabric to sell.

How much more bee fabric does Jen have than Toshi?



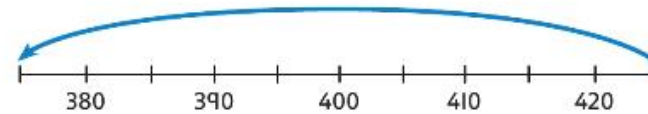
I think this is a find the difference. I can use subtraction.

$$213 - 80 = \square \text{ m}$$

Jen has m of bee fabric more than Toshi.



- 3 What calculation does the number line show?

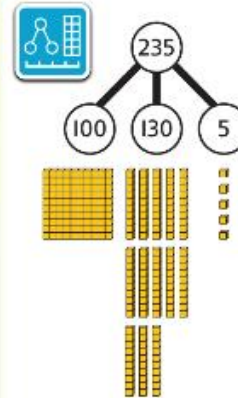


$$425 - \square = \square$$

- 4 Flo is trying to solve $235 - 60$.

Flo has represented her exchange using a part-whole model.

Explain the calculation and the method used here.



My part-whole model is a different way of showing 235.

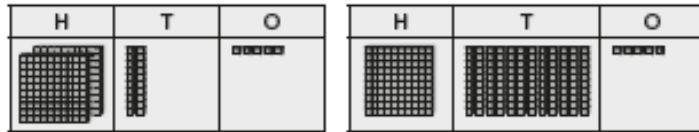


Think of your own word problem to go with this calculation.



Subtracting 10s from a 3-digit number

- 1 a) Lucas's book has 225 pages. He has read 70 pages.
How many pages does he have left to read?



$$12 \text{ tens} - \square \text{ tens} = \square \text{ tens}$$

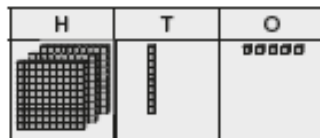
$$225 - 70 = \square \quad \text{Lucas has } \square \text{ pages left.}$$

- b) Sara's book has 231 pages. She has 60 pages left to read.
How many has she already read?



$$231 - 60 = \square \quad \text{Sara has } \square \text{ pages left.}$$


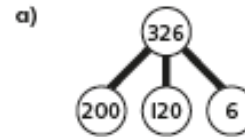
- c) George has read 80 pages. His dad has read 315 pages.
How many more pages has his dad read than George?




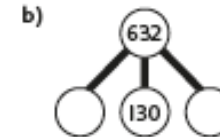
$$315 \ominus \square = \square$$

George's dad has read more pages.

- 2 Complete the part-whole model and missing base 10 equipment. Then complete the calculations.



$$326 - 60 = \square$$



$$632 - 80 = \square$$

- 3 Find the missing numbers.

30 less	Number	30 more
	215	245
	316	
		300

- 4 Complete the calculations.

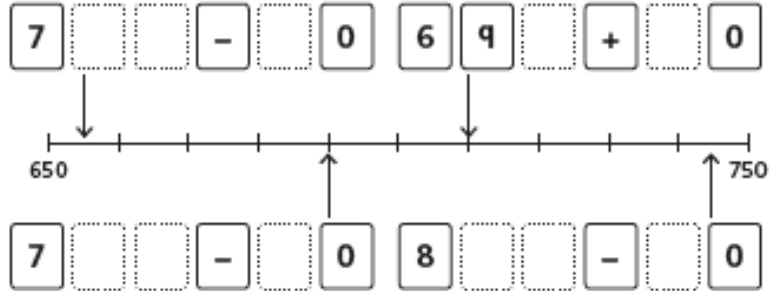
a) $340 - 60 = \square$

c) $350 - 60 = \square$

b) $\square = 821 - 70$

d) $\square = 831 - 70$

- 5 Complete the calculations to match each answer shown on the number line.



- 6 Reena thinks of a number. She adds 90, then adds 80, then adds 70. She finishes on a number with the digits 1, 2 and 3. What numbers could she have started on?


CHALLENGE

Reflect

- I know $15 - 8$ so I can work out $251 - 80$ by _____
- _____
- _____
- _____

Adding and subtracting a 3-digit and a 2-digit number



Discover



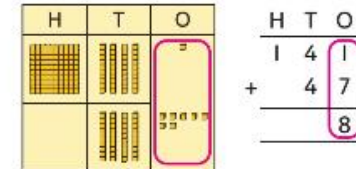
- 1 a) Holly drives from Leicester to Bath. She then drives to Weston-super-Mare.
How many miles is Holly's total journey?
- b) She has driven 11 miles from Leicester.
How far left to Bath?

Share

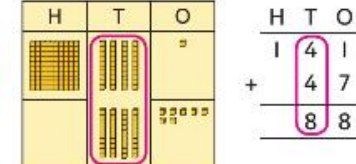
a) Now we are adding 10s and 1s.



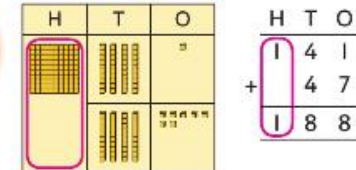
First we add the 1s.



Then we add the 10s.



Then we add the 100s.

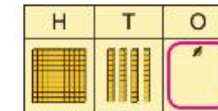


$$141 + 47 = 188$$

Holly's journey is 188 miles in total.

b) It is 141 miles from Leicester to Bath. Holly has travelled 11 miles.

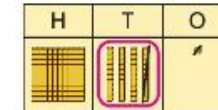
First subtract 1 from the ones.



Then subtract 1 ten.

$$141 - 11 = 130$$

It is still 130 miles to Bath.



Think together

- 1 Jack has already driven 74 miles on the way to Cardiff from Norwich.

How much of the journey is left?

$$\begin{array}{r} \text{H T O} \\ - \\ \hline \hline \end{array}$$

There are miles left of the journey.



- 2 Kay has driven 21 miles already. How much of the journey is left?

H	T	O

$$\begin{array}{r} \text{H T O} \\ - \quad 21 \\ \hline \hline \end{array}$$

$$\square - 21 = \square$$

miles are left.



- 3 How far is the total journey?

H T O

The total journey is miles.



- 4 Discuss the different methods you would use to solve these calculations.

$$\begin{array}{r} 130 + 51 \\ 891 - 60 \end{array}$$

$$\begin{array}{r} 609 - 7 \\ 938 - 26 \end{array}$$

$$\begin{array}{r} 48 + 431 \\ 205 + 50 \end{array}$$

$$234 + 52$$

I would write columns

I would solve mentally

I would check using equipment

I can do some of these mentally.

I would check using equipment or write the calculation down.

CHALLENGE

Adding and subtracting a 3-digit and a 2-digit number

- 1 a) On Monday a postman delivered 152 letters. On Tuesday he delivered 37 letters. How many letters did he deliver in total?

H	T	O

$$\begin{array}{r} \text{H T O} \\ 152 \\ + \quad \quad \\ \hline \end{array}$$

$152 + 37 = \square$

He delivered letters in total.

- b) On Friday, the postman delivered 41 fewer letters than on Monday. How many letters did the postman deliver on Friday?

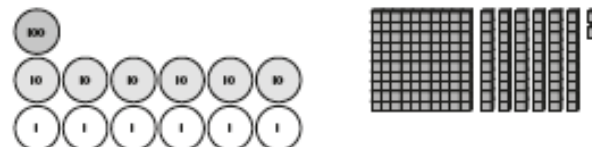
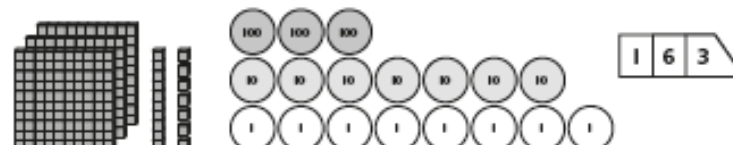
H	T	O

$$\begin{array}{r} \text{H T O} \\ \quad \quad \\ - \quad \quad \\ \hline \end{array}$$

$152 - \square = \square$

He delivered letters on Friday.

- 2 Match the calculations to the pictures. Which one does not have a matching picture?



- $196 - 33$ $378 - 61$ $101 + 34$ $41 + 125$
 $33 + 342$ $399 - 21$ $177 - 15$

- 3 Complete the calculations. Invent another for the pattern in each column.

$111 + 11 = \square$	$123 + 11 = \square$	$987 - 11 = \square$
$111 + 22 = \square$	$123 + 22 = \square$	$987 - \square = 965$
$111 + 33 = \square$	$123 + \square = 156$	$987 - \square = 954$
$111 + 55 = \square$	$123 + \square = 178$	$\square - 55 = 932$
$\square + \square = \square$	$\square + \square = \square$	$\square - \square = \square$

- 4 Complete the calculations.

$$\begin{array}{r} \text{H T O} \\ 153 \\ + 42 \\ \hline \end{array}$$

$$\square \bigcirc \square = \square$$

$$\begin{array}{r} \text{H T O} \\ 858 \\ - 35 \\ \hline \end{array}$$

$$\square \bigcirc \square = \square$$

- 5 Fill in the missing digits and write the calculations in full.

$$\begin{array}{r} \text{H T O} \\ 7 \\ + 4 \\ \hline 2 \text{ } 9 \text{ } 6 \end{array}$$

$$\square \bigcirc \square = \square$$

$$\begin{array}{r} \text{H T O} \\ 6 \text{ } 8 \\ - 3 \\ \hline 4 \text{ } 6 \end{array}$$

$$\square \bigcirc \square = \square$$

CHALLENGE

Reflect

Convince your partner that $453 + 41 = 494$ and $453 - 41 = 412$

- _____
- _____
- _____

Adding a 3-digit and a 2-digit number

Discover




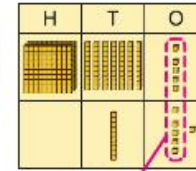
- 1 a) Zoe buys a large fish tank and a pump.
How much does Zoe spend altogether?
- b) Aaron buys a zebrafish and a clownfish.
How much does this cost in total?

Share

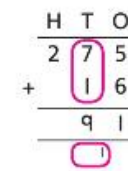
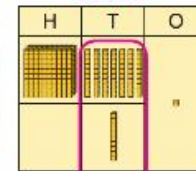
a)



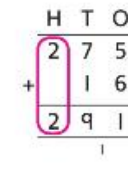
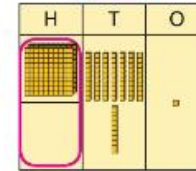
First add the 1s. Exchange 10 ones for 1 ten.



Then add the 10s. Don't forget the exchanged 10.




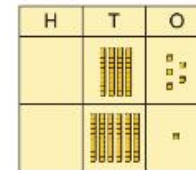
And then add the 100s.



$$275 + 16 = 291$$

Zoe spends £291 altogether.

b) $45 + 61 = 106$



The zebrafish and the clownfish cost £106 in total.

Think together

- 1 Tia buys a large fish tank and a clownfish.
How much does she spend?

H	T	O

$$\begin{array}{r} \text{H T O} \\ 275 \\ + 61 \\ \hline \end{array}$$

$275 + 61 = \square$

Tia spends £ \square in total.

- 2 Solve these additions: $126 + 57$ and $156 + 27$.
What do you notice? Can you explain?

H	T	O

$$\begin{array}{r} \text{H T O} \\ 126 \\ + 57 \\ \hline \end{array}$$

H	T	O

$$\begin{array}{r} \text{H T O} \\ 156 \\ + 27 \\ \hline \end{array}$$

- 3 Mark and Poppy wanted to write their additions in columns.
What mistakes did they make?

Mark's addition

$$\begin{array}{r} \text{H T O} \\ 154 \\ + 72 \\ \hline 126 \end{array}$$

Poppy's addition

$$\begin{array}{r} \text{H T O} \\ 164 \\ + 27 \\ \hline 1811 \end{array}$$

- 4 How many different additions can you make using these cards?

3	3	3	8	8
			+	

Do any of your calculations add to the same total? Explain why.



Now I can solve any addition with 3 digits and 2 digits.

I will make up some additions where you exchange for both 10s and 100s.



Adding a 3-digit and a 2-digit number

- 1 a) The other sunflower is 23 cm taller.

What is its height?

H	T	O

H	T	O
1	6	8
+	2	3



168 cm tall

$$168 + 23 = \square$$

The other sunflower is \square cm tall.

- b) A sunflower is 183 cm tall. It grows 51 cm taller. How tall is it now?

H	T	O

H	T	O
1	8	3
+		

$$183 + \square = \square$$

Now it is \square cm tall.

- 2 Complete this addition.

H	T	O
+		

- 3 Sort the calculations into three groups.

$238 + 71$

$827 + 31$

$712 + 38$

$327 + 18$

$318 + 72$

$731 + 28$

$73 + 182$

$28 + 137$

No
exchange

Exchange
10 ones

Exchange
10 tens

- 4 Complete these additions.

H	T	O
2	5	8
+	4	7

H	T	O
3	0	3
+	1	7

H	T	O
5	2	5
+	7	6

$b) 188 + 13 = \square$

$d) 50 + 672 = \square$

$f) \square = 39 + 461$

5 Find the missing digits.



a) $3\boxed{}5 + 6\boxed{} = 416$

b) $35\boxed{} + \boxed{}2 = 416$

6 Use each number once. Write additions so that they all have to exchange 10 ones and 10 tens.

CHALLENGE

		+		
		+		
		+		

			+		
			+		
			+		

I chose the six pairs by

Reflect

Explain how to add a 3-digit and a 2-digit number in three steps.

- Step 1: _____
- Step 2: _____
- Step 3: _____
- _____

Subtracting a 2-digit number from a 3-digit number



Discover



1 a) How many new trees survived?

Luis worked it out this way. What mistake did he make?

$$\begin{array}{r} \text{H T O} \\ 175 \\ - 38 \\ \hline 143 \end{array}$$



7 tens - 3 tens = 4 tens
8 ones - 5 ones = 3 ones.
So $175 - 38 = 143$.

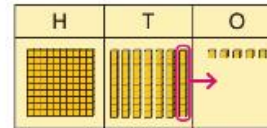
Luis

b) What is the correct answer?

Share

a) Luis has subtracted the 1s in the wrong order.

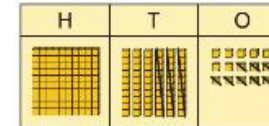
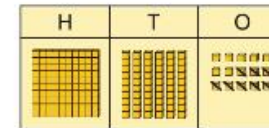
Luis should subtract 8 ones. He needs to exchange a ten.



b) $175 - 38 = \square$



You should first subtract 8 ones. Then subtract 3 tens.



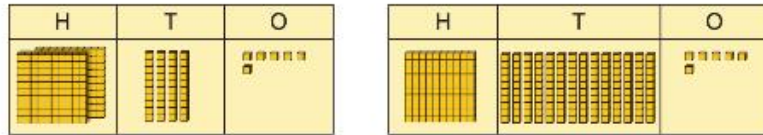
I will write it as columns. I wonder how to show the exchange of 1 ten.

$$\begin{array}{r} \text{H T O} \\ 175 \\ - 38 \\ \hline 137 \end{array}$$

$175 - 38 = 137$

Think together

- 1 Next autumn, they plant 246 new trees. 63 of them are blown down. How many are left?

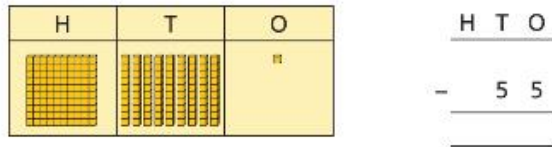


$$246 - 63 = \square$$

\square trees are left.

H	T	O
2	4	6
-	6	3

- 2 They planted 55 oak trees and 191 birch trees. How many more birch did they plant?



They planted \square more birch trees.

- 3 How many more plum than apricot trees did they plant in the orchard?

Trees	Number planted
Apricot	43
Plum	221
Apple	302
Walnut	65

I am not sure whether to exchange a 10 or a 100 first.

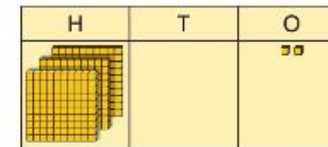


H	T	O
2	2	1
-	4	3

- 4 Flo is trying to work out $302 - 65$ to find how many more apple than walnut trees have been planted.



I need to exchange a ten, but 302 has 0 tens.



What should Flo do to solve the subtraction?

You can check by doing an addition.



Subtracting a 2-digit number from a 3-digit number

1 There are 345 children at school on Thursday.

a) A minibus takes 27 children on a trip. How many children are left in school?

H	T	O

H	T	O
3	4	5
-		
	2	7

$345 - 27 = \square$

There are children left in school.

b) On Friday there are 345 children at school. 54 children have packed lunch. The rest have school dinners. How many school dinners is that?

H	T	O

H	T	O
	5	4
-		

$345 - 54 = \square$

children have school dinners.

2 Find 66 less than each number shown.

a)

3	4	7
---	---	---

$$\begin{array}{r} \text{H T O} \\ 347 \\ - 66 \\ \hline \end{array}$$

b)

4	5	6
---	---	---

$$\begin{array}{r} \text{H T O} \\ 456 \\ - 66 \\ \hline \end{array}$$

3 Complete these subtractions.

a)
$$\begin{array}{r} \text{H T O} \\ 173 \\ - 45 \\ \hline \end{array}$$

c)
$$\begin{array}{r} \text{H T O} \\ 260 \\ - 76 \\ \hline \end{array}$$

b) $231 - 62 = \square$

d) $988 - 99 = \square$

4 Use each digit card once to make a subtraction. Find five different solutions and mark the results on the number line.

2

2

2

5

9

□

□

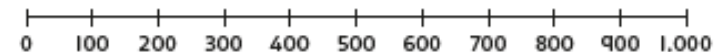
□


□

-

□

□




- 5 Find and correct the mistake in the subtraction. 

$157 - 38 = \square$

	H	T	O
	1	5	7
-	3	8	
	1	2	1

	H	T	O
-	3	8	

- 6 Crack the code. Each symbol represents one digit. 

	H	T	O
	▲	■	▲
-		▲	■
	■	▲	1

$\square = \square$

$\triangle = \square$

Reflect

There have been ten lessons in this unit. Think about what you learnt. What are the three most important things to remember?

- 1. _____
- 2. _____
- 3. _____
- My favourite lesson was _____
- _____